

1st



Hampshire County Schools 2019-2020 Snow Ice Packet (SIP)

Day 3


When inclement weather occurs each PreK-12 student is responsible to complete assignments on SIP Days as designated by the superintendent. The SIP Days will be counted as instructional days. To be "present" the student must submit the completed SIP work to the teacher on the next day school is in session. Failure to submit completed work constitutes an "absence".

Teachers are available at the schools to support students on SIP Days. Students will double-check their work and parents will sign below.

Name _____

Date _____ Grade _____

Parent signature _____



RETELL IT!

Retell the story with words or illustrations.

Beginning









Middle

End

BUILD IT!

Read the words. Write each word in the correct box.

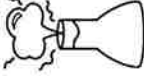





1. fume	5. cute
2. cube	6. mute
3. huge	7. rule
4. mule	8. fuse

MAGIC E

I can read u_e words.

READ IT!


fume	
cube	
huge	
mule	
cute	
fuse	

Name _____

Name _____


Date _____

Grade 1



Write in the missing numbers.

1	2		4	5		7	8		10
11		13			16			19	20
	22	23		25		27		29	



Circle odd or even.

4	even
	odd
9	even
	odd

3	even
	odd
10	even
	odd

Name _____

Date _____

Grade 1

$$\begin{array}{r} 3 \\ + 3 \\ \hline \end{array}$$

$$\begin{array}{r} 5 \\ - 2 \\ \hline \end{array}$$

$$\begin{array}{r} 7 \\ - 4 \\ \hline \end{array}$$

$$\begin{array}{r} 6 \\ + 0 \\ \hline \end{array}$$

$$\begin{array}{r} 8 \\ - 3 \\ \hline \end{array}$$

$$\begin{array}{r} 9 \\ + 1 \\ \hline \end{array}$$

$$\begin{array}{r} 4 \\ - 4 \\ \hline \end{array}$$

$$\begin{array}{r} 5 \\ - 5 \\ \hline \end{array}$$

$$\begin{array}{r} 7 \\ + 2 \\ \hline \end{array}$$

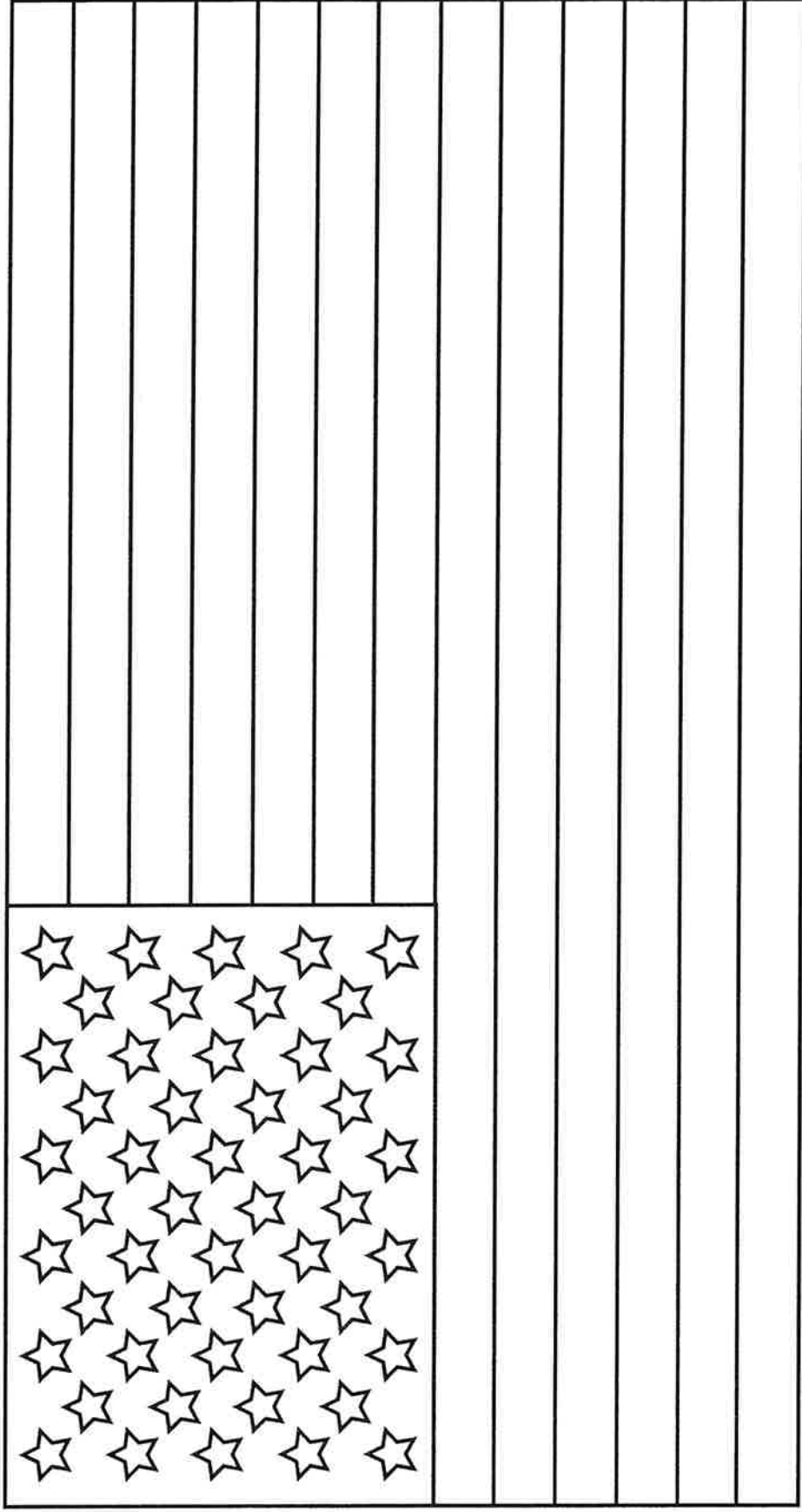
$$\begin{array}{r} 6 \\ + 3 \\ \hline \end{array}$$

$$\begin{array}{r} 7 \\ - 5 \\ \hline \end{array}$$

$$\begin{array}{r} 10 \\ + 0 \\ \hline \end{array}$$

Color The U.S. Flag

The U.S. Flag has thirteen stripes to represent the thirteen original colonies. There are 50 stars for all 50 states.




How many stars were on the original flag, designed in 1777?

Answer: 13



Solid, Liquid, Gas?

Draw a line connecting the pictures on the left to the matching phase of matter on the right.



PE: Physical Education

After you finish your Reading Work

Put a check in the box after you finish

- Crab Walk for 1 minute
- Bear Crawl for 1 minute

After you finish your Math Work

Put a check in the box after you finish

- Skip for 1 minute
- Gallop for 1 minute

After you finish your Music Work

Put a check in the box after you finish

- Duck Walk for 1 minute
- Catcher Squats for 1 minute



Name: _____

"Time" for Music

Create your own rhythm pattern in the blank boxes below.

